




22. You have the following four number cards:



- What is the smallest four-digit even number you can make with these cards? \_\_\_\_\_
- What is the largest four-digit even number you can make with these cards? \_\_\_\_\_
- What is the difference between the largest four-digit even number and the smallest four-digit even number you found? \_\_\_\_\_

Show your work and clearly explain your answer.