


7. Allie is going to the hardware store to buy the following items:

	Unit Price
1 can of paint	\$7.59
1 can of paint remover	\$4.75
1 drop cloth	\$3.89
2 paint brushes	\$2.99
1 painter's cap	\$1.89

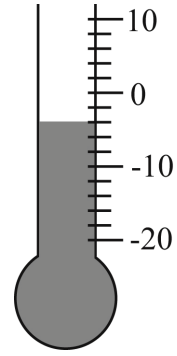
Allie has only dollar bills in her wallet. What is the least amount of money Allie will need to pay for these items, including a 7% sales tax?

- A. \$23.00
 B. \$25.00
 C. \$26.00
 D. \$27.00



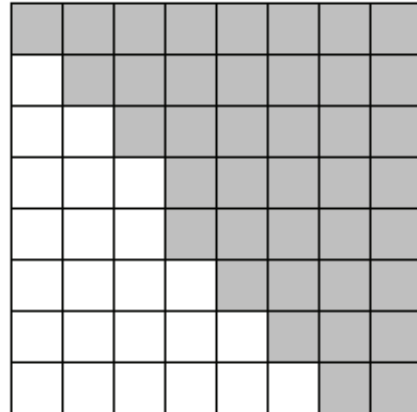
8. What part of the figure shown above is shaded? Write the fraction in simplest terms.

- A. $\frac{5}{3}$
 B. $\frac{3}{8}$
 C. $\frac{8}{5}$
 D. $\frac{5}{8}$



9. At 12:00 P.M. Jason looked at a thermometer shown above. If the temperature increased by 3 degrees every hour, what was the temperature at 3:00 P.M.?

- A. -1°C
 B. 3°C
 C. 5°C
 D. 9°C



10. Which of the following decimals represents the shaded portion of the square shown above?

- A. 0.375
 B. 0.500
 C. 0.625
 D. 0.750